





Circle the things that an herbivore would eat.



The arrows in a food web point from a food to the animals that eat it.


Write an H next to the animals that are herbivores.





Answer Key

Circle the things that an herbivore would eat.



The arrows in a food web point from a food to the animals that eat it.

Write an H next to the animals that are herbivores.

